

# Modeling Latches and Flip-flops

## Introduction

Sequential circuits are digital circuits in which the output depends not only on the present input (like combinatorial circuits), but also on the past sequence of inputs. In effect, these circuits must be able to remember something about the past history of the inputs. Thus the timing concept is introduced and the clock signal provides the timing essence to the sequential circuits. Latches and flip-flops are commonly used memory devices in sequential circuits. *Please refer to the Vivado tutorial on how to use the Vivado tool for creating projects and verifying digital circuits.*

## Objectives

After completing this lab, you will be able to:

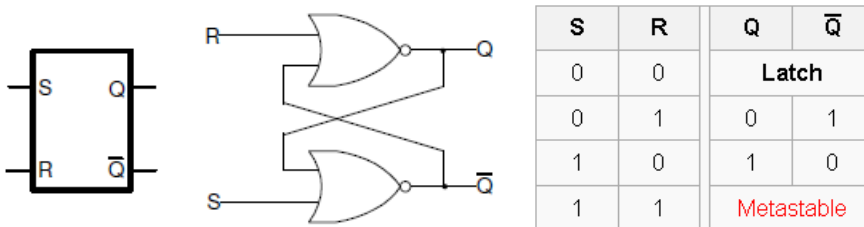
- Model various types of latches
- Model flip-flops with control signals

## Latches

## Part 1

Storage elements can be classified into latches and flip-flops. A latch is a device with exactly two stable states: a high-output and a low-output. A latch has a feedback path, so information can be retained by the device. Therefore latches are volatile memory devices, and can store one bit of data for as long as the device is powered. As the name suggests, latches are used to "latch onto" information and hold the data in place.

An **SR latch** (Set/Reset) is an asynchronous device: it works independently of control signals and relies only on the state of the S and R inputs. The symbol, the circuit using NOR gates, and the truth table are shown below.

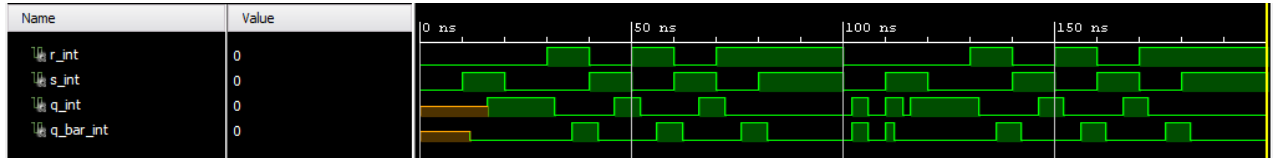


Though Xilinx FPGA can implement such a latch using one LUT (Look-Up Table) circuit, the following VHDL code shows how such circuit can be modeled using structural and dataflow modeling.

```
architecture SR_latch of SR_latch_dataflow is begin
    Q <= Qbar nor R;
    Qbar <= Q nor S;
end SR_latch;
```

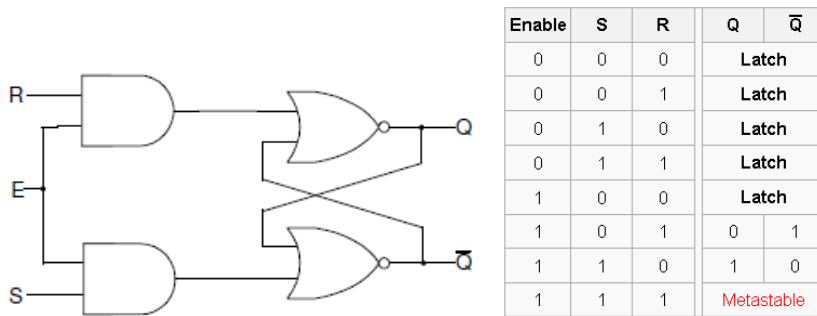
```
architecture SR_latch of SR_latch_dataflow_arch is begin
    Q_i <= Q after 2ns;
    Qbar_i <= Qbar after 2ns;
    Q <= not(R or Qbar) after 2ns;
    Qbar <= not(S or Q) after 2ns;
end SR_latch;
```

- 1-1. Design a SR latch (you can base it on the example shown above). Synthesize the design and view the RTL schematic of the Open Synthesized Design. Develop a testbench to test (see waveform below) and validate the design. Simulate the design. Assign S input to SW0 and R input to SW1. Assign Q to LED0 and Qbar to LED1. Implement the design and verify the functionality in hardware.**

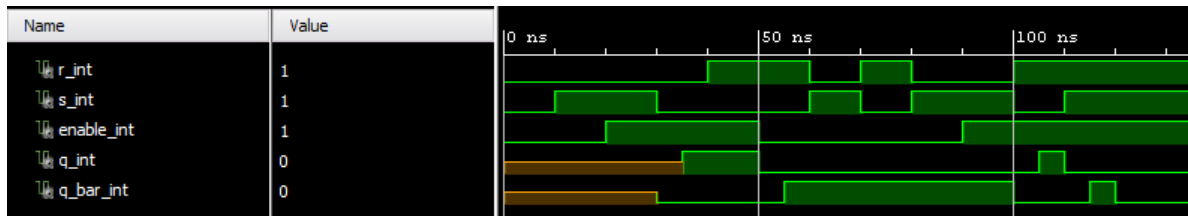


- 1-1-1. Open Vivado and create a blank project called *lab5\_1\_1*.
- 1-1-2. Create and add the VHDL module with the *SR\_latch\_dataflow* code.
- 1-1-3. Develop a testbench (see waveform above) to test and validate the design.
- 1-1-4. Add the appropriate board related master XDC file to the project and edit it to include the related pins, assigning *S* input to **SW0**, *R* input to **SW1**, *Q* to **LED0**, and *Qbar* to **LED1**.
- 1-1-5. Set the *tcl.pre* option in the *Bitstream Settings* to point to the provided **lab5\_prehook.tcl** file. This file allows a combinatorial loop to be uploaded to the board.
- 1-1-6. Synthesize the design and view the schematic under the Open Synthesized Design process group. Verify that it uses 2 LUTs and 4 IOs (2 IBUF, and 2 OBUF).
- 1-1-7. Implement the design and view the project summary. It should show 2 LUTs, 2 slice, and 4 IOs.
- 1-1-8. Generate the bitstream, download it into the Basys3 or the Nexys4 DDR board, and verify the functionality.

In some situations it may be desirable to dictate when the latch can and cannot latch. The **gated SR latch** is a simple extension of the SR latch which provides an *Enable* line which must be driven high before data can be latched. Even though a control line is now required, the SR latch is not synchronous, because the inputs can change the output even in the middle of an enable pulse. When the *Enable* input is low, then the outputs from the AND gates must also be low, thus the *Q* and bar *Q* outputs remain latched to the previous data. Only when the *Enable* input is high can the state of the latch change, as shown in the truth table. When the enable line is asserted, a gated SR latch is identical in operation to an SR latch. The *Enable* line is sometimes a clock signal, but is usually a read or writes strobe. The symbol, circuit, and the truth table of the gates SR latch are shown below.

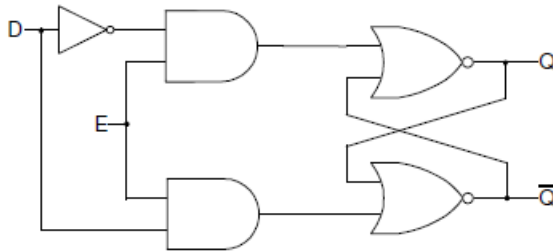


**1-2. Design a gated SR latch (shown in the figure above) using dataflow modeling. Synthesize the design and view the schematic of the Open Synthesized Design. Develop a testbench to test (generate input as shown below) and validate the design. Simulate the design. Assign S input to SW0, R input to SW1, and Enable input to SW2. Assign Q to LED0 and Qbar to LED1. Implement the design and verify the functionality in the hardware.**



- 1-2-1. Open Vivado and create a blank project called *lab5\_1\_2*.
- 1-2-2. Create and add the VHDL module that will model the gated SR latch using dataflow modeling. Assign 2 units delay to each assignment statement used in the model.
- 1-2-3. Develop a testbench to test and validate the design. It should generate the input stimuli as shown in the figure above.
- 1-2-4. Add the appropriate board related master XDC file to the project and edit it to include the related pins, assigning S input to **SW0**, R input to **SW1**, Enable to **SW2**, Q to **LED0**, and Qbar to **LED1**.
- 1-2-5. Set the *tcl.pre* option in the *Bitstream Settings* to point to the provided **lab5\_prehook.tcl** file. This file allows a combinatorial loop to be uploaded to the board.
- 1-2-6. Synthesize the design and view the schematic under the Open Synthesized Design process group. Verify that it uses 2 LUTs and 5 IOs.
- 1-2-7. Implement the design and view the Utilization Report. It should show 2LUTs, 1 slice, and 5 IOs.
- 1-2-8. Generate the bitstream, download it into the Basys3 or the Nexys4 DDR board, and verify the functionality.

The **D latch** (D for "data") or **transparent latch** is a simple extension of the gated SR latch that removes the possibility of invalid input states (metastability). Since the gated SR latch allows us to latch the output without using the *S* or *R* inputs, we can remove one of the inputs by driving both the *Set* and *Reset* inputs with a complementary driver, i.e. we remove one input and automatically make it the inverse of the remaining input. The D latch outputs the *D* input whenever the *Enable* line is high, otherwise the output is whatever the *D* input was when the *Enable* input was last high. This is why it is also known as a transparent latch - when *Enable* is asserted, the latch is said to be "transparent" - it signals propagate directly through it as if it isn't there.



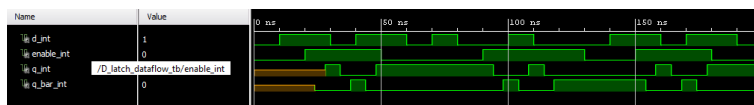
| Enable | D | Q     | $\bar{Q}$ |
|--------|---|-------|-----------|
| 0      | 0 | Latch |           |
| 0      | 1 | Latch |           |
| 1      | 0 | 0     | 1         |
| 1      | 1 | 1     | 0         |

D-latches can be modeled in behavioral modeling as shown below.

```
architecture behavior of D_latch is begin
process (D, Enable) begin
    if (Enable = '1') then
        Q <= D;
        Qbar <= not(D);
    end if;
end process;
end behavior;
```

Note that since we do not say what to do when Enable is low, the circuit "remembers" the previous state. While Enable is high and since the `always` block is also sensitive to D, Q and Qbar will be updated at any time D changes, giving it a "transparent" behavior. The distinction between the blocking and non-blocking assignment is covered in Lab 7 (Testbenches for Sequential Circuits).

- 1-3. Design a D latch (shown in the figure above) using dataflow modeling. Synthesize the design and view the schematic of the Open Synthesized Design. Develop a testbench to test (generate input as shown below) and validate the design. Simulate the design. Assign D input to SW0, and Enable input to SW1. Assign Q to LED0 and Qbar to LED1. Implement the design and verify the functionality in hardware.**



- 1-3-1.** Open Vivado and create a blank project called `lab5_1_3`.

- 1-3-2.** Create and add the VHDL module that will model the D latch using dataflow modeling. Assign 2 units delay to each assignment statement used in the model.

- 1-3-3. Develop a testbench to test and validate the design. It should generate the input stimuli as shown in the figure above.
- 1-3-4. Add the appropriate board related master XDC file to the project and edit it to include the related pins, assigning *d* input to **SW0**, *Enable* to **SW1**, *Q* to **LED0**, and *Qbar* to **LED1**.
- 1-3-5. Set the *tcl.pre* option in the *Bitstream Settings* to point to the provided **lab5\_prehook.tcl** file. This file allows a combinatorial loop to be uploaded to the board.
- 1-3-6. Synthesize the design and view the schematic under the Open Synthesized Design process group. Verify that it uses 2 LUTs and 4 IOs.
- 1-3-7. Implement the design and view the Utilization Report. It should show 2 LUTs, 1 slice, and 4 IOs.
- 1-3-8. Generate the bitstream, download it into the Basys3 or the Nexys4 DDR board, and verify the functionality.

## Flip-flops

## Part 2

Flip-flops are clocked circuits whose output may change on an active edge of the clock signal based on its input. Unlike latches, which are transparent and in which output can change when the gated signal is asserted upon the input change, flip-flops normally would not change the output upon input change even when the clock signal is asserted. Flip-flops are widely used in synchronous circuits.

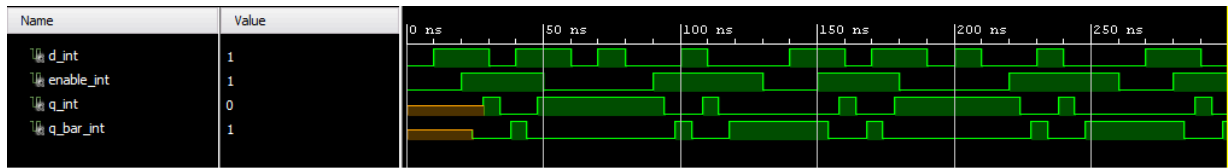
The D flip-flop is a widely used type of flip-flop. It is also known as a *data* or *delay* flip-flop. The D flip-flop captures the value of the D-input at a definite portion of the clock cycle (such as the rising edge of the clock). That captured value becomes the Q output. At other times, the output Q does not change. The D flip-flop can be viewed as a memory cell or a delay line. The active edge in a flip-flop could be rising or falling. The following figure shows rising (also called positive) edge triggered D flip-flop and falling (negative edge) triggered D flip-flop.

The positive edge triggered D flip-flop can be modeled using behavioral modeling as shown below.

```
architecture behavior of D_ff is begin
process (clk) begin
    if rising_edge(clk) then
        Q <= D;
    end if;
end process;
end behavior;
```

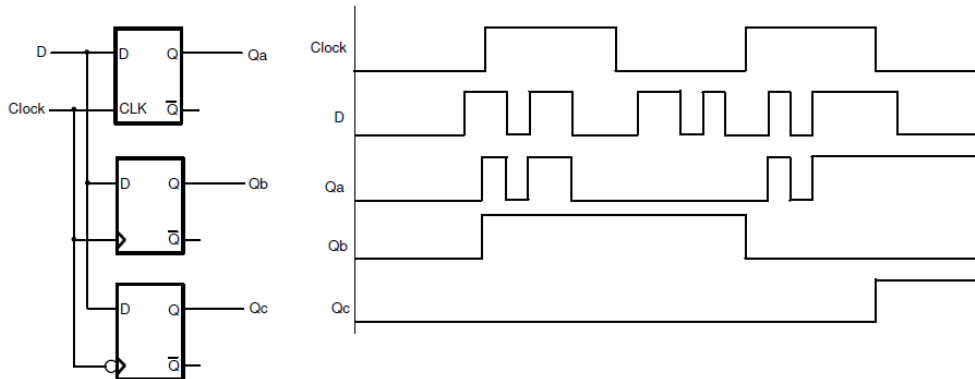
Note that the `process` block is sensitive to any change to `clk` value, however the `rising_edge` function (defined in IEEE library) checks for the value change from any value to final value of '1'. When a change (event) on the sensitive signal occurs, the statements in the `if` block will be executed.

**2-1. Model a D flip-flop using behavioral modeling. Develop a testbench to validate the model (see diagram below). Simulate the design.**



- 2-1-1. Open Vivado and create a blank project called *lab5\_2\_1*.
- 2-1-2. Create and add the VHDL module that will model simple D flip-flop.
- 2-1-3. Develop a testbench to validate the design behavior. It should generate the input stimuli as shown in the above timing diagram.

The following circuit and timing diagrams illustrate the differences between D-latch, rising edge triggered D flip-flop and falling edge triggered D flip-flops.



**2-2. Model the circuit, as shown above, using behavioral modeling. You will use three *process* blocks. Develop a testbench generating input as shown above. Simulate and validate the design.**

- 2-2-1. Open Vivado and create a blank project called *lab5\_2\_2*.
- 2-2-2. Create and add the VHDL module that will model the given circuit.
- 2-2-3. Develop a testbench to test and analyze the design behavior. It should generate the input stimuli as shown in the timing diagram.

Often it is necessary to have the synchronous element to start with a defined output. It is also desired and required in some circuits to force the synchronous element to a known output ignoring input at the D input. The D flip-flop discussed above can be modified to have such functionality. Such D flip-flop is known as D flip-flop with synchronous set and reset capabilities if the desired output is obtained on the active edge of the clock, otherwise it is viewed to have asynchronous preset and clear. The models of each kind are shown below.

```

architecture behavior of D_ff_with_synch_reset is begin
process (clk) begin
    if rising_edge(clk) begin
        if (reset = '1') then
            Q <= '0';
        else
            Q <= D;
        end if;
    end if;
end process;
end behavior;

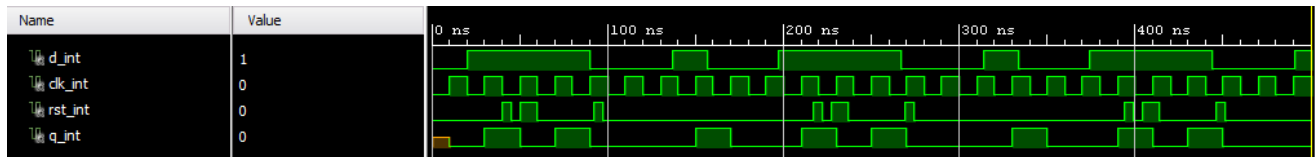
```

```

architecture behavior of D_ff_with_asynch_reset is begin
process (clk, clear) begin
    if (clear = '1') then
        Q <= '0';
    elsif rising_edge(clk) then
        Q <= D;
    end if;
end process;
end behavior;

```

- 2-3. Model the D flip-flop with synchronous reset using behavioral modeling. Develop a testbench to test (generate input as shown) and validate the design. Simulate the design. Assign D input to SW0, reset to SW1, Clk to SW15, and output Q to LED0. Verify the design in hardware.**

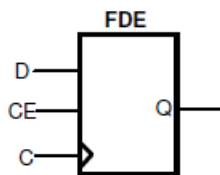


- 2-3-1.** Open Vivado and create a blank project called *lab5\_2\_3*.
- 2-3-2.** Create and add the VHDL module that will model the D flip-flop with synchronous reset.
- 2-3-3.** Develop a testbench to test and analyze the design behavior. It should generate the input stimuli as shown in the timing diagram.
- 2-3-4.** Add the appropriate board related master XDC file to the project and edit it to include the related pins, assigning *D* input to **SW0**, *reset* input to **SW1**, *Clk* to **SW2**, and *Q* to **LED0**.
- ```
set_property CLOCK_DEDICATED_ROUTE FALSE [get_nets { clk }];
```
- The above line of code needs to be added to the XDC file to allow SW15 be used as a clock.
- 2-3-5.** Set the *tcl.pre* option in the *Bitstream Settings* to point to the provided **lab5\_prehook.tcl** file. This file allows a combinatorial loop to be uploaded to the board.
- 2-3-6.** Synthesize and implement the design.

Look at the Project Summary and note that 1 BUFG and 4 IOs are used. The BUFG is used because the clock signal is used in the design.

- 2-3-7.** Generate the bitstream, download it into the Basys3 or the Nexys4 DDR board, and verify the functionality.

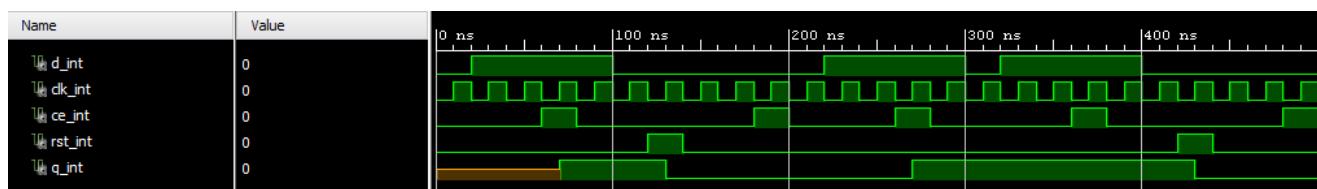
In FPGAs, LUT and FF located in different configurable logic blocks (CLB) are connected using routing resources. During implementation, the tools will use these resources depending on the way the circuits are modeled, the type and amount of resources required, and the speed at which the circuit is going to be driven. Often resources used for exchanging information are placed close to each other; however, there can be a situation when it may not be possible. When related flip-flops, between which the information gets exchanged are placed away from each other, the clocks arriving at the source and destination flip-flops may not be at the same time creating what is called clock-skew. The clock-skew can alter the behavior of the circuit. In some other cases, certain flip-flops may not need to update their output at every asserted clock edges. In order to control the behavior, flip-flops in FPGA have an additional control signal called Clock Enable (CE). In ASIC technology, gated clocks are used to control the behavior. A symbol of the flip-flop with CE is shown below.



```
architecture behavior of D_ff_with_ce is begin
process (clk) begin
    if rising_edge(clk) then
        if (ce = '1') then
            Q <= D;
        end if;
    end if;
end process;
end behavior;
```

```
architecture behavior of D_ff_with_ce_and_synch_reset is begin
process (clk) begin
    if rising_edge(clk) then
        if (reset = '1') then
            Q <= '0';
        elsif (ce = '1') then
            Q <= D;
        end if;
    end if;
end process;
end behavior;
```

- 2-4. Model the D flip-flop with synchronous reset and clock enable using behavioral modeling. Develop a testbench to test (generate input as shown) and validate the design. Simulate the design. Assign D input to SW0, reset to SW1, Clk to SW15, ce to SW2, and output Q to LED0. Verify the design in hardware.**





- 2-4-1.** Open Vivado and create a blank project called *lab5\_2\_4*.
- 2-4-2.** Create and add the VHDL module that will model the D flip-flop with synchronous reset and clock enable.
- 2-4-3.** Develop a testbench to test and analyze the design behavior. It should generate the input stimuli as shown in the above timing diagram.
- 2-4-4.** Add the appropriate board related master XDC file to the project and edit it to include the related pins, assigning *D* to **SW0**, *reset* to **SW1**, *Clk* to **SW15**, *ce* to **SW3**, and *Q* to **LED0**.
- ```
set_property CLOCK_DEDICATED_ROUTE FALSE [get_nets { clk }];
```
- The above line of code needs to be added to the XDC file to allow SW15 be used as a clock.
- 2-4-5.** Set the *tcl.pre* option in the *Bitstream Settings* to point to the provided **lab5\_prehook.tcl** file. This file allows a combinatorial loop to be uploaded to the board.
- 2-4-6.** Synthesize and implement the design.
- Look at the Project Summary and note that 1 BUFG and 5 IOs are used. The BUFG is used because the clock signal is used in the design.
- 2-4-7.** Generate the bitstream, download it into the Basys3 or the Nexys4 DDR board, and verify the functionality.

In digital circuits, another kind of flip-flop, called T or Toggle, is used to implement clock divider circuits. It can be used to divide the input by 2. If more than one T flip-flop is cascaded then the clock division can be 2 power of the number of flip-flops used. The T flip-flop has a T input (data), a clock input, and optionally reset and enable control signals.

```
architecture behavior of T_ff is begin
process (clk) begin
    if falling_edge(clk) then
        Q <= not(Q);
    end if;
end process;
end behavior;
```

The T flip-flop can also have a control signal called CE (clock enable) which will allow clock division to take place only when it is asserted. The following code models the functionality of the T flip-flop that is sensitive to a falling edge of clock and has active-low reset and active-high T control signals.

```
architecture behavior of T_ff_enable is begin
process (clk) begin
    if falling_edge(clk) then
        if (enable = '1') and (T = '1') then
            Q <= not(Q);
        else
            Q <= Q;
        end if;
    end if;
end process;
end behavior;
```

**2-5. Model a T flip-flop with synchronous negative-logic reset and clock enable using the above code. Assign T input to SW0, enable to SW1, Clk to SW15, and output Q to LED0. Verify the design in hardware.**

2-5-1. Open Vivado and create a blank project *lab5\_2\_5*.

2-5-2. Create and add the VHDL module that will model the D flip-flop with synchronous reset and clock enable.

2-5-3. Add the appropriate board related master XDC file to the project and edit it to include the related pins, assigning *T* input to **SW0**, *enable* input to **SW1**, *Clk* to **SW15**, and *Q* to **LED0**.

```
set_property CLOCK_DEDICATED_ROUTE FALSE [get_nets { clk }];
```

The above line of code needs to be added to the XDC file to allow SW15 be used as a clock.

2-5-4. Set the *tcl.pre* option in the *Bitstream Settings* to point to the provided **lab5\_prehook.tcl** file. This file allows a combinatorial loop to be uploaded to the board.

2-5-5. Synthesize and implement the design.

2-5-6. Generate the bitstream, download it into the Basys3 or the Nexys4 DDR board, and verify the functionality.

## Conclusion

In this lab, you learned the functionality of various kinds of latches and flip-flops. You modeled and verified the functionality of these components. Xilinx also provides some basic latches and flip-flops library components which a designer can instantiate and use instead of writing a model. Writing a model provides portability across vendors and technologies whereas instantiating library components enable a quick use of a component without re-inventing the wheel.

Here is the table that lists some of the functionality and the corresponding library component supported by the Vivado Synthesis Tool. Please refer to [ug953-vivado-7series-libraries.pdf](http://www.xilinx.com/docs/toc/ug953-vivado-7series-libraries.pdf) file for more components and instantiation examples.

|      |  |
|------|--|
| FDCE | D Flip-Flop with Asynchronous Clear and Clock Enable       |
| FDPE | D Flip-Flop with Asynchronous Preset and Clock Enable      |
| FDRE | D Flip-Flop with Synchronous Reset and Clock Enable        |
| LDCE | Transparent Latch with Asynchronous Clear and gate Enable  |
| LDPE | Transparent Latch with Asynchronous Preset and gate Enable |